

Nombre _____

Fecha _____


DOBLE

1 VEZ

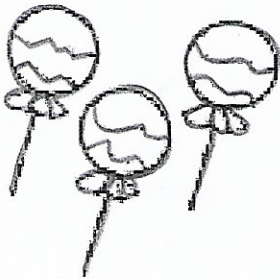
+

1 VEZ


=



El doble de 4 es

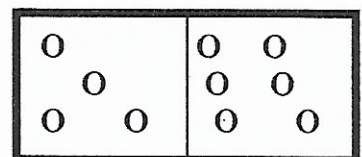
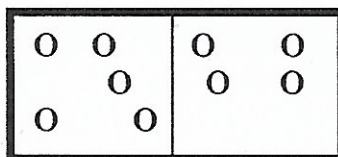
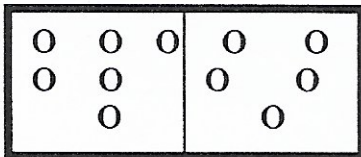


El doble de 3 es



El doble de 2 es

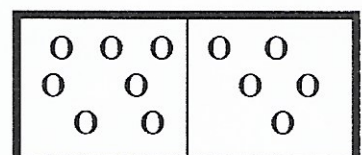
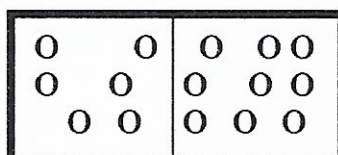
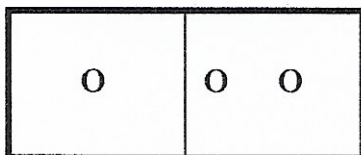
Cuenta y pinta el lado que tiene **menos** puntos:



.....

.....

.....



.....

.....

.....