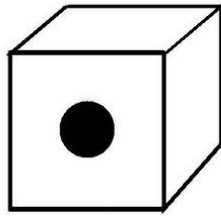



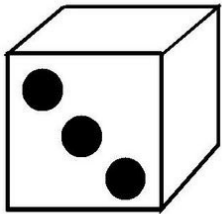
1 2 3 4




1 2 3 4



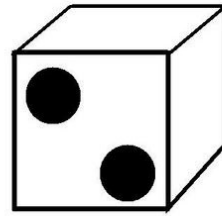
1 2 3 4



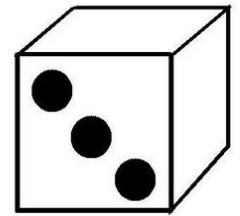
1 2 3 4



1 2 3 4







1 2 3 4





1 2 3 4

RODEA EL NÚMERO QUE CORRESPONDE A LA CANTIDAD DE PUNTOS

Primer turno



Segundo turno



- Cuenta y escribe la cantidad de puntos que obtuvo cada niña.
- Marca con una ✓ la niña que ganó en cada turno.